

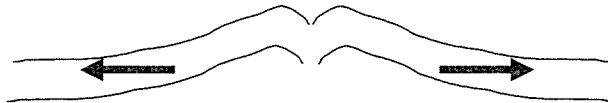
Name _____

Date _____

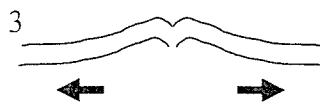

Notes: Plate Tectonics Sea-Floor Spreading

According to p. _____ of the Earth Science Reference Tables the type of boundary found beneath the Atlantic Ocean is _____ causing the width of this ocean to _____.

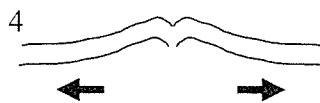
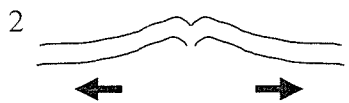
Evidence for the existence of sea-floor spreading:



- Age of ocean crust _____
- Temperature of ocean crust _____
- Density of ocean crust _____
- Magnetic Striping _____



Normal polarity _____



Reverse polarity _____

Where is the spreading zone (divergent boundary) in this map of sea-floor magnetism?



According to p. _____ of the Earth Science Reference Tables the type of boundary found beneath the Pacific Ocean is _____ causing the width of this ocean to _____.

These are some things I learned, questions I have, or thoughts about the lesson:
