

Name _____

--	--	--	--	--	--

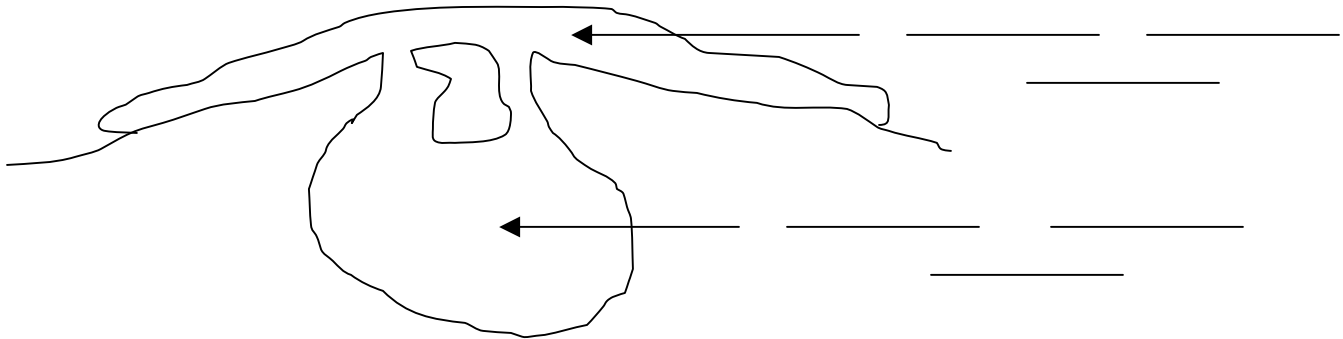
Date _____

Notes: Rocks

Igneous Rocks


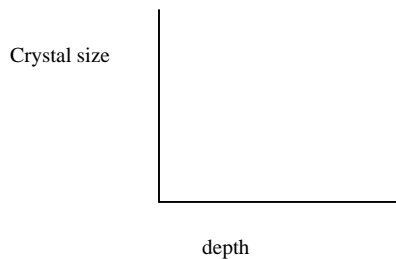
According to P. ____ of the ESRT igneous rocks form through this process: _____

Environment of Formation: _____



How does the depth likely affect the rate at which the magma cools? _____

What effect will this have on the size of the crystals that form? _____



Composition

Mafic means: _____

density: _____ color: _____ minerals: _____

Felsic means: _____

density: _____ color: _____ minerals: _____

Rock Identification Examples:

Light color and very coarse texture: _____

Dark color and fine texture: _____

Gray color and coarse texture: _____

Monominerallic (): _____

This is one question I have about today's lesson:
